



St John Fisher RC Primary School

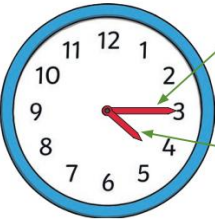
Year 3 Maths Knowledge Organiser

Summer Term – Time

Objectives

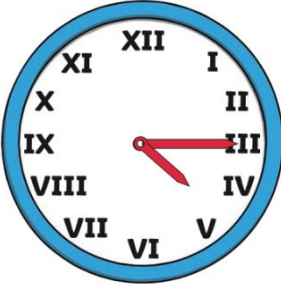
I can tell the time from an analogue clock, including using Roman numerals from I to XII, and 12-hour and 24-hour clocks


I can write the time using an analogue clock, including using Roman numerals from I to XII, and 12-hour and 24-hour clocks



Minute Hand
The long hand points to the minutes past the hour.


Hour Hand
The short hand points to the hour. If this hand is pointing between the hours, it is the earlier hour.






12:00

twelve o'clock




12:30

half past twelve



12:15

quarter past twelve



12:45

quarter to one

Key Vocabulary

Analogue	A clock or watch that contains moving hands and hours with markings from 1 to 12 to show the time
Digital	A clock or watch that displays the time using numerals, rather than hands on a dial like an analog clock
Hour	An hour is 60 minutes. There are 24 hours in a day
Minute	A minute is 60 seconds. There are 60 minutes in an hour
Seconds	There are 60 seconds in a minute
12 Hour	A clock that divides the 24 hours of a day into two periods: a.m. (before midday) and p.m. (after midday)
24 Hour	A way of telling the time where it is divided into 24 hours, starting at 00:00 (midnight) and ending at 23:59 (midnight)
Roman Numerals	a number system that was developed in ancient Rome and used a combination of letters to represent numbers.

Sentence Stems

There are ____ seconds in a minute	There are ____ hours in a day
There are ____ minutes in an hour	The letter ____ represents the number ____

Assessment